

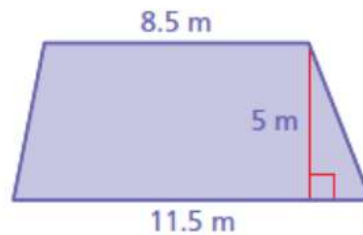
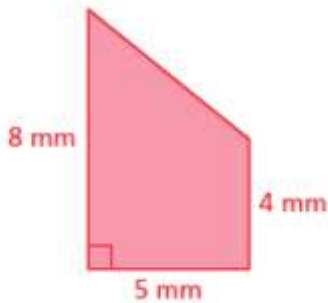
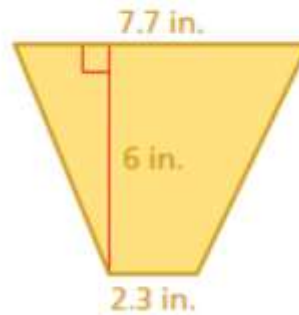
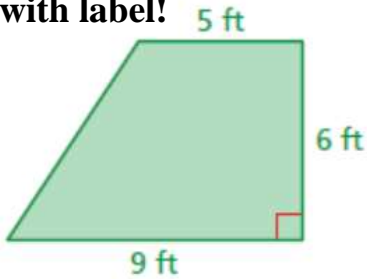
4.3 Area of Trapezoids Notes

A **trapezoid** has _____ sides and _____ set of lines are parallel.

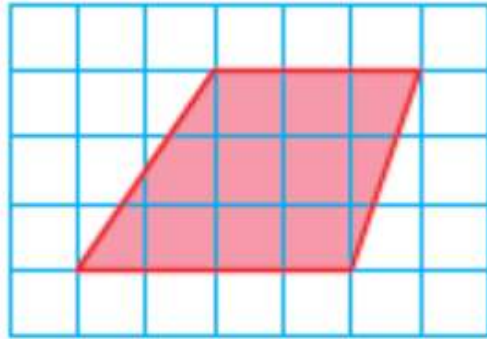
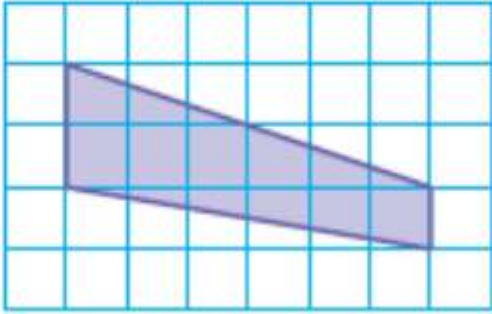
Area of a Trapezoid:

$$\text{Area} = \text{_____} \times \text{_____} \times (\text{_____} + \text{_____})$$

Find the area of each trapezoid. Be sure to show your formula, substitution, & answer with label!



Find the area of each trapezoid. Be sure to show your formula, substitution, & answer with label!



You can use a trapezoid to approximate the shape of Scott County, Virginia. The population is about 23,200. About how many people are there per square mile?

